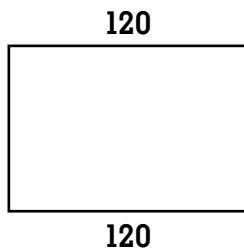


LogoPaths: 400 Steps with Missing Measures (page 1 of 2)

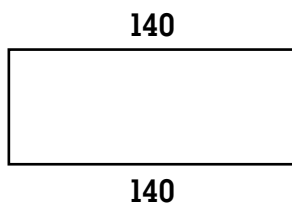
Each of the rectangles below has a perimeter of 400 steps. The length of two sides is shown. Use the *LogoPaths* software to draw each rectangle. Label the length of the other two sides and record your commands below.

1.

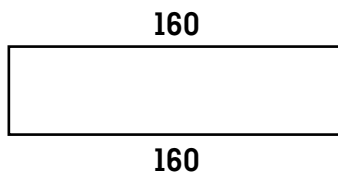
_____	_____
_____	_____

2.

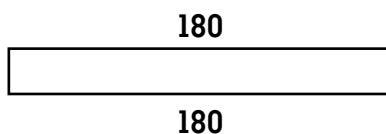
_____	_____
_____	_____

3.

_____	_____
_____	_____

4.

_____	_____
_____	_____


5.

_____	_____
_____	_____

LogoPaths: 400 Steps with Missing Measures

(page 2 of 2)

6.



_____	_____
_____	_____

7.



_____	_____
_____	_____

8.



_____	_____
_____	_____

9. Write about any patterns that you noticed as you drew these rectangles with perimeters of 400 steps.